



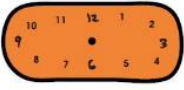


























Mathematics

Class Four (4)

Topic	Description	Resources and Exercises																						
<p>TICK, TICK, TICK</p>	<p>Assess yourself by attempting the questions in the attached document under exercises. After completing your assignment, email it to the address provided.</p> <p>stmarysgrade4maths@gmail.com</p>	<p>1. Three friends read time from a clock. Who is right?</p> <table border="1" data-bbox="742 694 1220 1041"> <thead> <tr> <th></th> <th>Cheeku</th> <th>Bittu</th> <th>Pinki</th> </tr> </thead> <tbody> <tr> <td></td> <td>12:03</td> <td>12:15</td> <td>3:00</td> </tr> <tr> <td></td> <td>7:25</td> <td>5:07</td> <td>5:35</td> </tr> <tr> <td></td> <td>3:35</td> <td>7:03</td> <td>7:15</td> </tr> </tbody> </table> <p>2. Show the following times in the clock:</p> <table border="0" data-bbox="710 1120 1308 1534"> <tr> <td> 3:10</td> <td> 6:40</td> <td> 4:45</td> </tr> <tr> <td> 2:20</td> <td> 3:15</td> <td> 7:35</td> </tr> </table> <p>3. Do you like sky watching? If yes, then this one should interest you:</p> <p>(a) At what time does the sun rise at your place? –</p> <p>(b) When does the sun set? –</p> <ul style="list-style-type: none"> • Does the sun rise and set at the same times every day? • Look at a newspaper and see the time of sunrise and sunset in different months. 		Cheeku	Bittu	Pinki		12:03	12:15	3:00		7:25	5:07	5:35		3:35	7:03	7:15	 3:10	 6:40	 4:45	 2:20	 3:15	 7:35
	Cheeku	Bittu	Pinki																					
	12:03	12:15	3:00																					
	7:25	5:07	5:35																					
	3:35	7:03	7:15																					
 3:10	 6:40	 4:45																						
 2:20	 3:15	 7:35																						