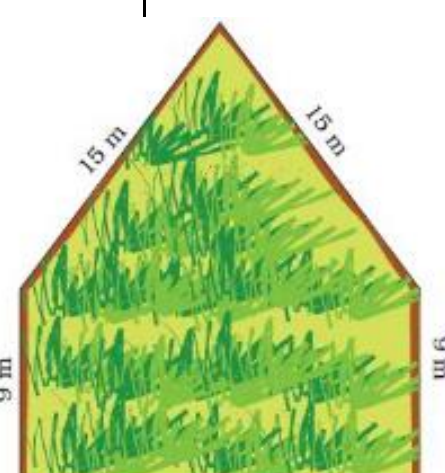


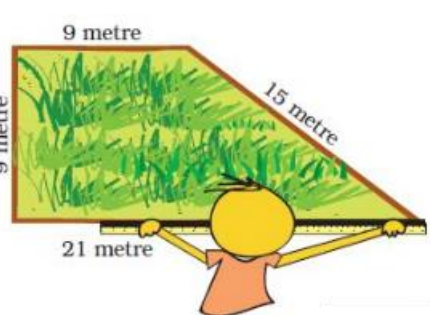




Mathematics

Class Four (4)

Topic	Description	Resources and Exercises
FIELDS AND FENCES	<p>Assess yourself by attempting the questions in the attached document under exercises. After completing your assignment, email it to the address provided.</p> <p>stmarysgrade4maths@gmail.com</p>  	<p>1. Rahmat needs to find the length of the boundary of the field. Can you find it from this picture? See the length of each side written near it.</p>  <p>Rahmat bought a roll of 70 m wire for the fence.</p>  <p>How much wire did Rahmat give to Ganpat?</p> <p>2. Ganpat thanked Rahmat and started fencing his own field. But he needed to get more wire.</p> <p>How long is the boundary of Ganpat's field?</p> <p>How much more wire will Ganpat need for his field?</p> <div data-bbox="718 1724 1149 2016" style="border: 2px solid blue; border-radius: 50%; padding: 20px; text-align: center; background-color: #add8e6;"><p>LET'S HELP RAHMAT & GANPAT</p></div>